

Name: _____

Date: _____

Double-Digit Number Sense

For the following numbers, circle the tens column and underline the ones column.

Example: 77

28

8

82

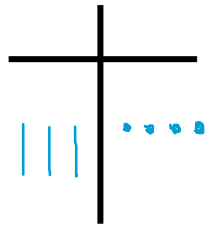
10

49

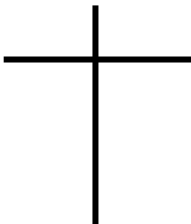
17

Complete the T-chart for the following numbers (using bars to represent tens and dots to represent ones)

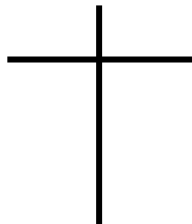
Example: 34



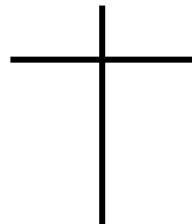
27



62



50



16

